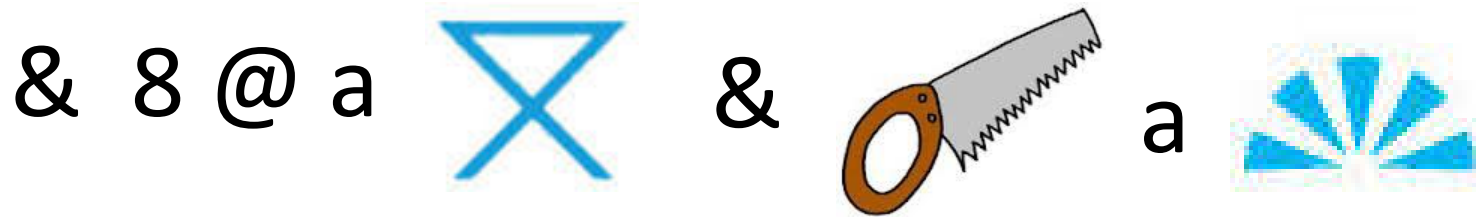
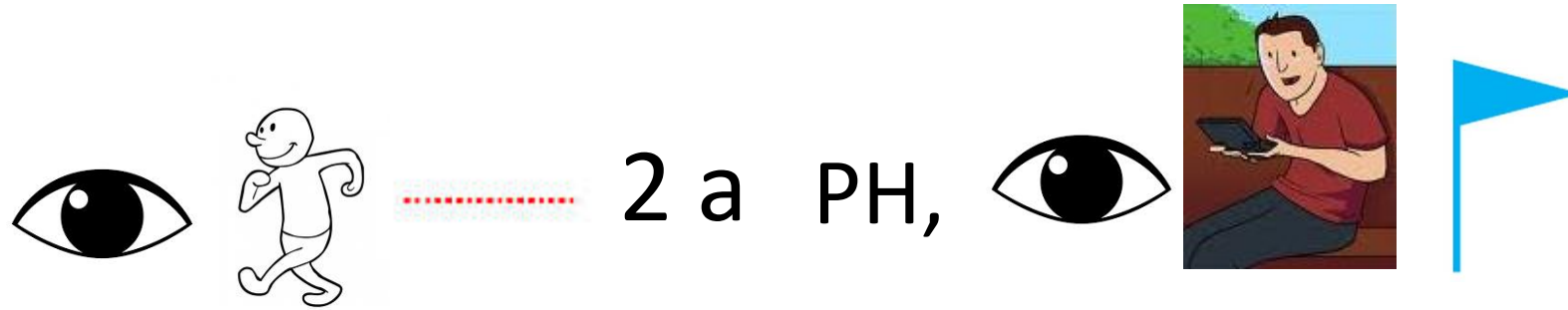


Welcome to **M**arches Geography



Crack the code...






Direction and Map Symbols

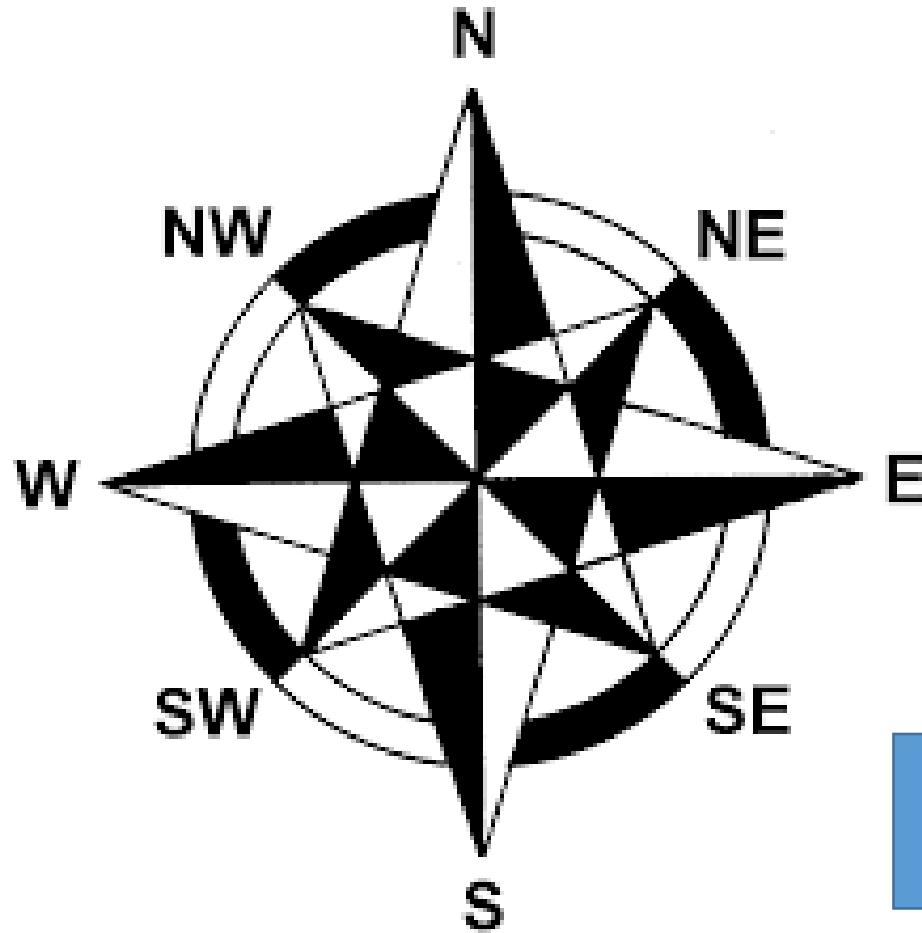
1. I can use and read an 8 point compass.
2. I can identify key symbols from an OS map.

4 Point Compass



Do you know a Rhyme?


Then it become more complicated....
8 Point Compass



Make a copy of
this

Symbols are used on a map to show where facilities are. They save space and make facilities easy to find

They can be small pictures, lines, letters, shortened words or coloured areas.



Map symbols are *ALWAYS* shown in a 'key' on the map to tell you what each symbol means.

1:25 000 scale Explorer™ Map Symbol Flashcards

	1		14		27		40
	2		15		28		41
	3		16		29		42
	4		17		30		43
	5		18		31		44
	6		19		32		45
	7		20		33		46
	8		21		34		47
	9		22		35		48
	10		23		36		49
	11		24		37		50
	12		25		38		51
	13		26		39		52

For further information, contact the Education Team, Ordnance Survey, Romsey Road, SOUTHAMPTON, SO16 4GU.

© Crown copyright

Can you guess what some of these symbols are for?

- 1 = ?
- 2 = ?
- 3 = ?



Answers

1:25 000 scale Explorer™ Map Symbol Flashcards

1:25 000 scale Explorer™ Map Symbol Flashcards

	1		14		27		40
	2		15		28		41
	3		16		29		42
	4		17		30		43
	5		18		31		44
	6		19		32		45
	7		20		33		46
	8		21		34		47
	9		22		35		48
	10		23		36		49
	11		24		37		50
	12		25		38		51
	13		26		39		52

For further information, contact the Education Team,
Ordnance Survey, Romsey Road, SOUTHAMPTON,
SO16 4GU.

© Crown copyright

- | | |
|---|--|
| 1 Railway station | 28 Garden/arboretum |
| 2 Level crossing | 29 Place of worship with spire,
minaret or dome |
| 3 Motorway | 30 Place of worship with tower |
| 4 Trunk or main road | 31 Place of worship |
| 5 Footpath | 32 Youth hostel |
| 6 Bridleway | 33 School |
| 7 National Trail/Long Distance
Route; Recreational Route | 34 Post office |
| 8 Camp site/caravan site | 35 Public convenience |
| 9 Viewpoint | 36 Bus or coach station |
| 10 Picnic site | 37 Cliff |
| 11 Access information point | 38 Wind pump; wind generator |
| 12 Building of historic interest | 39 Electricity transmission line |
| 13 Recreation/leisure/sports centre | 40 Quarry |
| 14 Museum | 41 Footbridge |
| 15 Site of battle | 42 Well; spring |
| 16 Castle/fort | 43 Non-coniferous trees |
| 17 Cadw: Welsh Historic Monuments | 44 Coniferous trees |
| 18 Historic Scotland | 45 Marsh, reeds or saltings |
| 19 English Heritage | 46 Orchard |
| 20 National Park boundary | 47 Bracken, heath or rough
grassland |
| 21 Nature reserve | 48 Scrub |
| 22 Access land in woodland area | 49 Contours |
| 23 Access land boundary and tint | 50 Scree |
| 24 Cycle trail | 51 Sand; sand & shingle |
| 25 Information centre | 52 Mud |
| 26 Telephone | |
| 27 Parking | |

Activity: I have written a story, follow my story and map my route.

Skills you will be using:


Direction and map symbols.

Equipment:

- Print out of work sheet OR a blank piece of paper which you will need to draw lots of dots on to create the worksheet (see mine)
- Pencil,
- Ruler,
- Map symbols key,

Follow My Route

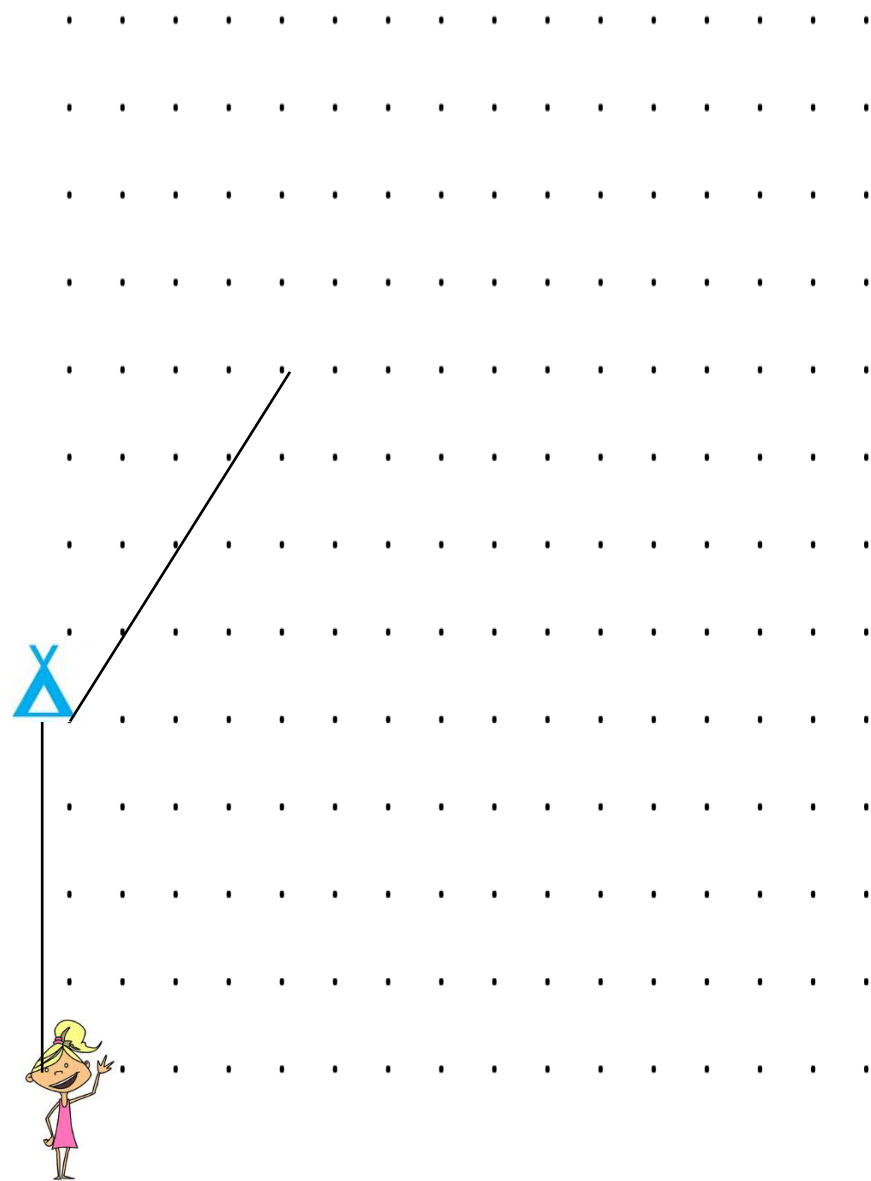
Miss Redfern had been kidnapped and taken North 4 dots to an empty campsite. From there she was taken North East 4 dots to a pub (public house) because her kidnapers were thirsty. It was becoming dark and she was being moved 4 dots South East to a train station where she was dumped for the night!



Miss Redfern had been kidnapped and taken North 4 dots to an empty campsite. From there she was taken North East 4 dots to a pub (public house) because her kidnapers were thirsty. It was becoming dark and she was being moved 4 dots South East to a train station where she was dumped for the night!

The next morning Miss Redfern had managed to free herself and had ran away to a picnic site 5 dots East. She met some friendly people who took her to a viewpoint 3 dots South and gave her some money. Miss Redfern walked 2 dots South West to use a public telephone to ring her family and then continued to walk West 6 dots to pray in a church with a steeple.

Miss Redfern was getting very tired and fed up so she walked along a foot path 3 dots North and saw a Radio Mast, she then went North West 3 dots until she got to a Heliport and got on a helicopter and flew home.



Either print out sheet **OR** draw on ppt **OR** use a ruler to draw some dots about 1cm apart.

Activity: Create your own story like mine

Make up a story about someone in your house. You can then give that person your story and teach them how to complete it.

Remember to use:

Symbols, compass directions and distance.

Hint:

Make sure your route will fit on the page

Follow the Route

• • • • • • • • • • • • • • • •

• • • • • • • • • • • • • • • •

• • • • • • • • • • • • • • • •

• • • • • • • • • • • • • • • •

• • • • • • • • • • • • • • • •

• • • • • • • • • • • • • • • •

• • • • • • • • • • • • • • • •

• • • • • • • • • • • • • • • •

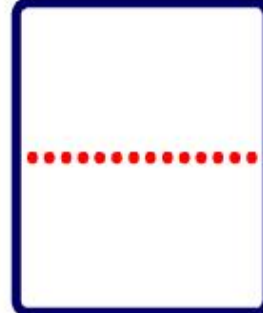
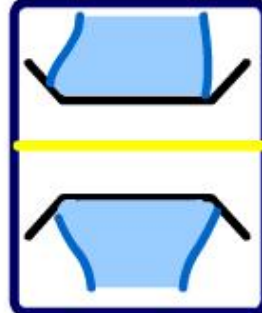

• • • • • • • • • • • • • • • •

• • • • • • • • • • • • • • • •

• • • • • • • • • • • • • • • •

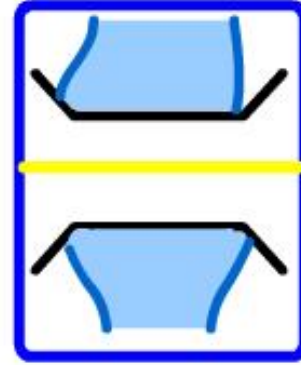

START

O.S. map symbols



Can you match the photo with the correct Ordnance Survey symbol?

Answers....



Crack the code...

